

Name: _____


Datum: _____

Plusaufgaben


ZR bis 3




Male die Stifte links blau und rechts rot an.




Schreibe die Aufgaben und das Ergebnis auf.



$$\underline{\quad} + \underline{\quad} = \underline{\quad}$$



$$\underline{\quad} + \underline{\quad} = \underline{\quad}$$




$$\underline{\quad} + \underline{\quad} = \underline{\quad}$$



$$\underline{\quad} + \underline{\quad} = \underline{\quad}$$



$$\underline{\quad} + \underline{\quad} = \underline{\quad}$$



$$\underline{\quad} + \underline{\quad} = \underline{\quad}$$

Plus- und Minusaufgaben

ZR bis 5



Schreibe die Aufgaben und das Ergebnis auf.



$$\underline{\quad} + \underline{\quad} = \underline{\quad}$$



$$\underline{\quad} - \underline{\quad} = \underline{\quad}$$



$$\underline{\quad} - \underline{\quad} = \underline{\quad}$$



$$\underline{\quad} + \underline{\quad} = \underline{\quad}$$



$$\underline{\quad} - \underline{\quad} = \underline{\quad}$$



$$\underline{\quad} + \underline{\quad} = \underline{\quad}$$

Name: _____ Datum: _____

Plusaufgaben

ZR bis 6



Male die Kreise blau und rot an.




Schreibe das Ergebnis auf.




$$4 + 2 = \underline{\quad}$$



$$1 + 5 = \underline{\quad}$$




$$6 + 0 = \underline{\quad}$$



$$2 + 4 = \underline{\quad}$$



$$0 + 6 = \underline{\quad}$$



$$3 + 3 = \underline{\quad}$$