



Trage die Zahlen ein und finde die Plusaufgaben.

6	6	6	6
<input type="text"/>	<input type="text"/>	<input type="text"/>	<input type="text"/>
<input type="text"/>	<input type="text"/>	<input type="text"/>	<input type="text"/>
+	+	+	+
7	7	7	7
<input type="text"/>	<input type="text"/>	<input type="text"/>	<input type="text"/>
<input type="text"/>	<input type="text"/>	<input type="text"/>	<input type="text"/>
5	5	5	5
<input type="text"/>	<input type="text"/>	<input type="text"/>	<input type="text"/>
<input type="text"/>	<input type="text"/>	<input type="text"/>	<input type="text"/>







Station 5



Addition im Zwanzigerraum

Rechenbienen

Addiere die Zahlen.





Rechne.

$2 + \underline{\quad} = \underline{\quad}$

●	●	◐	◐	◐	○	○	○	○	○
---	---	---	---	---	---	---	---	---	---

$5 - \underline{\quad} = \underline{\quad}$

$5 + \underline{\quad} = \underline{\quad}$

●	●	●	●	●	◐	◐	◐	○	○
---	---	---	---	---	---	---	---	---	---

$8 - \underline{\quad} = \underline{\quad}$

$6 + \underline{\quad} = \underline{\quad}$

●	●	●	●	●	●	◐	◐	○	○
---	---	---	---	---	---	---	---	---	---

$8 - \underline{\quad} = \underline{\quad}$

$4 + \underline{\quad} = \underline{\quad}$

●	●	●	●	◐	○	○	○	○	○
---	---	---	---	---	---	---	---	---	---

$5 - \underline{\quad} = \underline{\quad}$

$2 + \underline{\quad} = \underline{\quad}$

●	●	◐	◐	◐	◐	◐	◐	◐	○
---	---	---	---	---	---	---	---	---	---

$9 - \underline{\quad} = \underline{\quad}$

$2 + \underline{\quad} = \underline{\quad}$

●	●	◐	◐	◐	◐	◐	◐	○	○
---	---	---	---	---	---	---	---	---	---

$8 - \underline{\quad} = \underline{\quad}$

$9 + \underline{\quad} = \underline{\quad}$

●	●	●	●	●	●	●	●	●	◐
---	---	---	---	---	---	---	---	---	---

$10 - \underline{\quad} = \underline{\quad}$

$3 + \underline{\quad} = \underline{\quad}$

●	●	●	◐	◐	◐	◐	◐	○	○
---	---	---	---	---	---	---	---	---	---

$8 - \underline{\quad} = \underline{\quad}$

$4 + \underline{\quad} = \underline{\quad}$

●	●	●	●	◐	◐	◐	◐	○	○
---	---	---	---	---	---	---	---	---	---

$8 - \underline{\quad} = \underline{\quad}$

$6 + \underline{\quad} = \underline{\quad}$

●	●	●	●	●	●	◐	○	○	○
---	---	---	---	---	---	---	---	---	---

$7 - \underline{\quad} = \underline{\quad}$

$\underline{\quad} + \underline{\quad} = \underline{\quad}$


○	○	○	○	○	○	○	○	○	○
---	---	---	---	---	---	---	---	---	---

$\underline{\quad} - \underline{\quad} = \underline{\quad}$


$\underline{\quad} + \underline{\quad} = \underline{\quad}$

○	○	○	○	○	○	○	○	○	○
---	---	---	---	---	---	---	---	---	---

$\underline{\quad} - \underline{\quad} = \underline{\quad}$



Mäuse-Aufgaben



Elefanten-Aufgaben